



Grade 2

Formative Assessment Review of Math Indicators for Measurement

Directions: Students use their mini marker boards to answer each of these questions. Students hold up their answer so that teachers can earmark intervention needs. This formative assessment contains one question from each of the 13 indicators of this standard. Use the mimio slide to review and explain the answer or have students demonstrate their understanding by explaining it to the rest of the class.

Select the best units to measure the length of a pencil.



- ☐ A centimeters
- ☐ B meters

Ohio Indicator 1a

The best units to measure Mark's glass of orange juice is:



- ☐ A gallons
- ☐ B cups
- ☐ C quarts

Ohio Indicator 1b

The nurse weighs the students in the second grade class. What is the unit of measure used in the United States.



- ☐ A pounds
- ☐ B ounces
- ☐ C grams

Ohio Indicator 1c


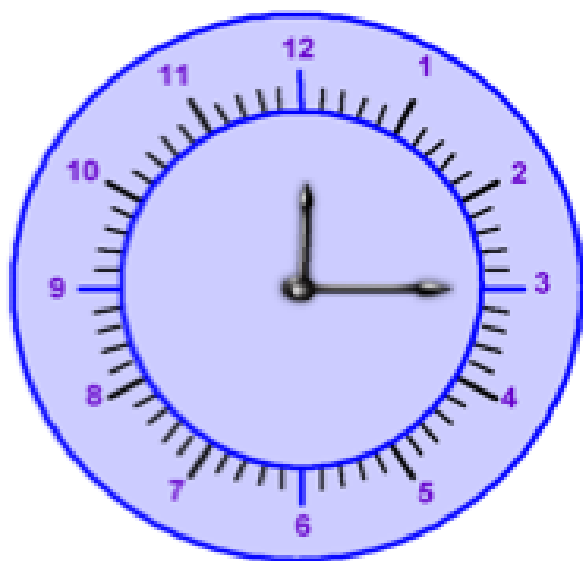
A paper clip is measured in:



- ☐ A pounds
- ☐ B ounces
- ☐ C grams

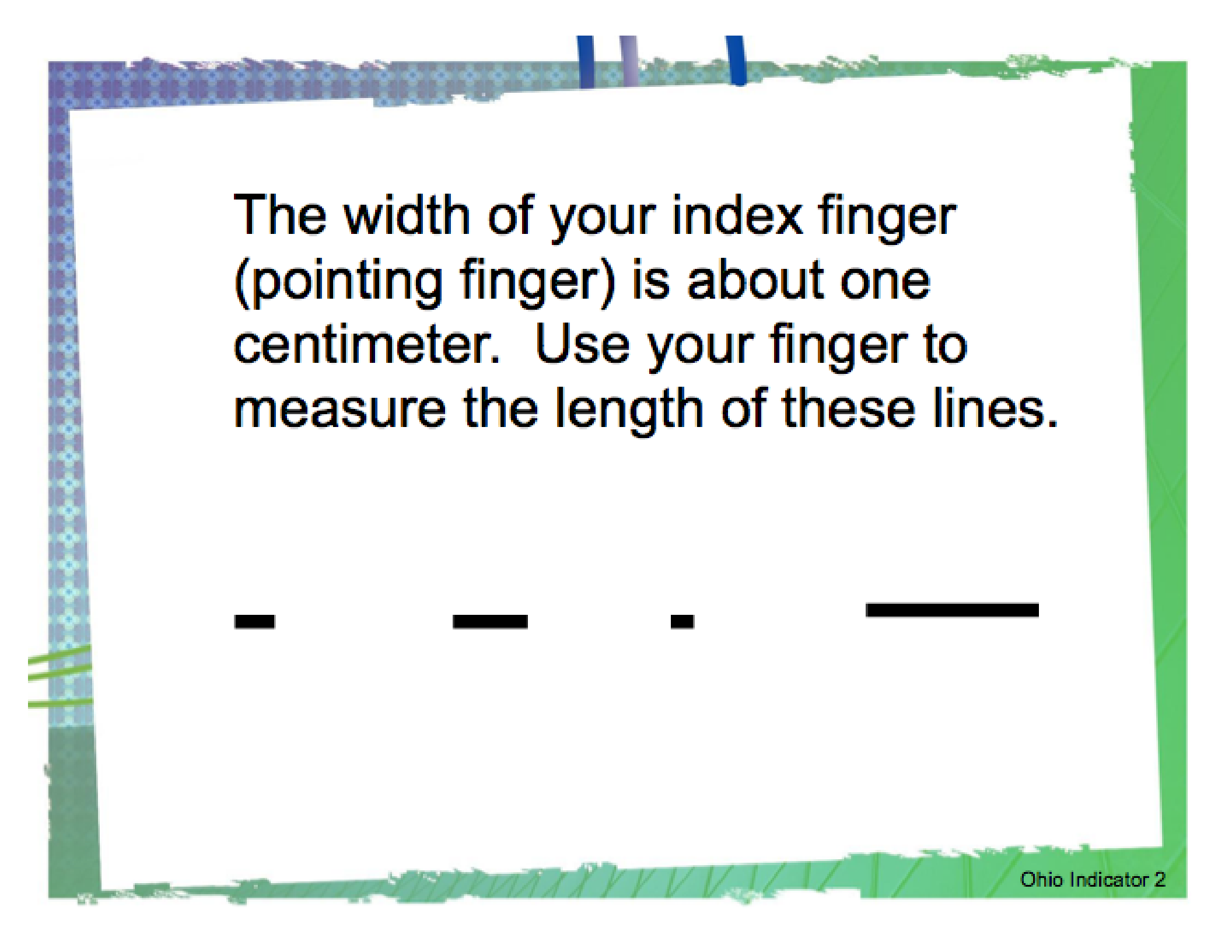
Ohio Indicator 1d

It is 12:15, and Leo has just finished lunch. Is the time AM or PM?



What time will it be in 15 minutes?





The width of your index finger
(pointing finger) is about one
centimeter. Use your finger to
measure the length of these lines.



Match the following by dragging the letter from column one to the matching box of column two.

A 12 inches

B 100 centimeters

C 3 feet


D 4 cups

E 16 ounces


F 30 minutes




1 meter




1 pound



1/2 hour



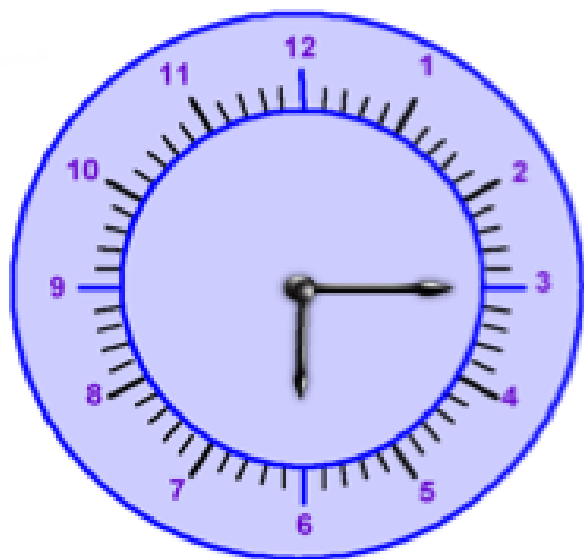
1 yard




1 foot



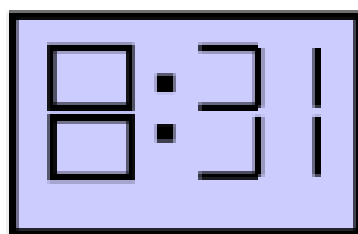
1 quart



Write the time displayed on the clock.




What is the time displayed on the digital clock.



- ☐ A 2:31
- ☐ B 8:32
- ☐ C 8:31

What is the length of
this pencil?



What measurement tool will your mother use to measure the amount of sugar she uses in a cake?

- Ⓐ ruler
- Ⓑ yardstick
- Ⓒ cup
- Ⓓ scales

Guess the length of a dollar bill in inches. Check the length with a ruler. Also guess the length in centimeters.

Estimate _____ (inches)

Correct length _____ (inches)



Estimate _____ (centimeters)

Correct length _____ (centimeters)

